



Cambridge IGCSE™

GEOGRAPHY

0460/43

Paper 4 Alternative to Coursework

May/June 2025

INSERT

1 hour 30 minutes

INFORMATION

- This insert contains additional resources referred to in the questions.
- You may annotate this insert and use the blank spaces for planning. **Do not write your answers** on the insert.



This document has **12** pages. Any blank pages are indicated.

Fig. 1.1 for Question 1

Students' questionnaire

Visitor questionnaire

I am doing a study of tourism in the town.

Are you visiting Ambleside today or do you live in the town?

.....

Please answer the following questions

1 Why are you visiting Ambleside?

.....

2 How far have you travelled to Ambleside?

..... km

3 How did you travel to Ambleside?

.....

4 How many days are you staying in Ambleside?

.....

Thank you for your time.

Results of students' visitor questionnaire

Table 1.1 for Question 1

Q1 Why are you visiting Ambleside?	number of answers
scenery in the surrounding countryside	21
shops and attractions in the town	42
activities such as hiking, sailing	34
friends and family live in the town	3

Table 1.2 for Question 1

Q2 How far have you travelled to Ambleside?	number of answers
less than 50 km	25
51 to 100 km	29
101 to 150 km	33
more than 150 km	13

Table 1.3 for Question 1

Q3 How did you travel to Ambleside?	number of answers
car	52
coach	27
bus	8
bicycle	13

Table 1.4 for Question 1

Q4 How many days are you staying in Ambleside?	number of answers
1	61
2 to 4	23
5 to 7	14
more than 7	2

Fig. 1.4 for Question 1

Students' interview questions

Questions asked in the interview with local residents

I am doing a study of tourism in Ambleside.

Can I do a brief interview with you to help me complete my geography fieldwork?

1 I have listed some possible problems of tourism in the town.

How much of a problem do you think these are? Tick (✓) your answer.

	very severe problem	quite severe problem	slight problem	not a problem
streets are crowded with people				
litter on the streets				
noise from people and vehicles				
parking is difficult				
traffic congestion				

Are there any other problems?

.....

.....

2 I have listed some possible benefits of tourism in Ambleside.

How important do you think these benefits are? Tick (✓) your answer.

	very important	quite important	slightly important	not important
tourism creates jobs in the area				
tourism brings money into the area				
local council has money to spend on facilities				
residents use the shops and tourist facilities				
better roads so the town is more accessible				

Are there any other benefits?

.....

.....

Thank you.

Table 1.5 for Question 1

Answers to interview question 1

problem	very severe problem	quite severe problem	slight problem	not a problem
streets are crowded with people	25	16	9	0
litter on the streets	13	21	16	0
noise from people and vehicles	10	14	21	5
parking is difficult	21	13	10	6
traffic congestion	22	20	4	4

Table 1.6 for Question 1

Answers to interview question 2

benefit	very important	quite important	slightly important	not important
tourism creates jobs in the area	39	4	7	0
tourism brings money into the area	42	8	0	0
local council has money to spend on facilities	31	9	5	5
residents use the shops and tourist facilities	14	15	11	10
better roads so the town is more accessible	18	21	5	6

Table 1.7 for Question 1

Results of environmental quality survey

	town centre	edge of town
traffic noise	2	6
air quality	2	5
attractiveness of buildings	6	4
road condition	3	3
graffiti	6	6
illegal parking	1	3
pedestrian noise	4	6

The students used a scale from 1 = very bad to 6 = very good

Fig. 2.1 for Question 2

Students' method to measure the beach profile

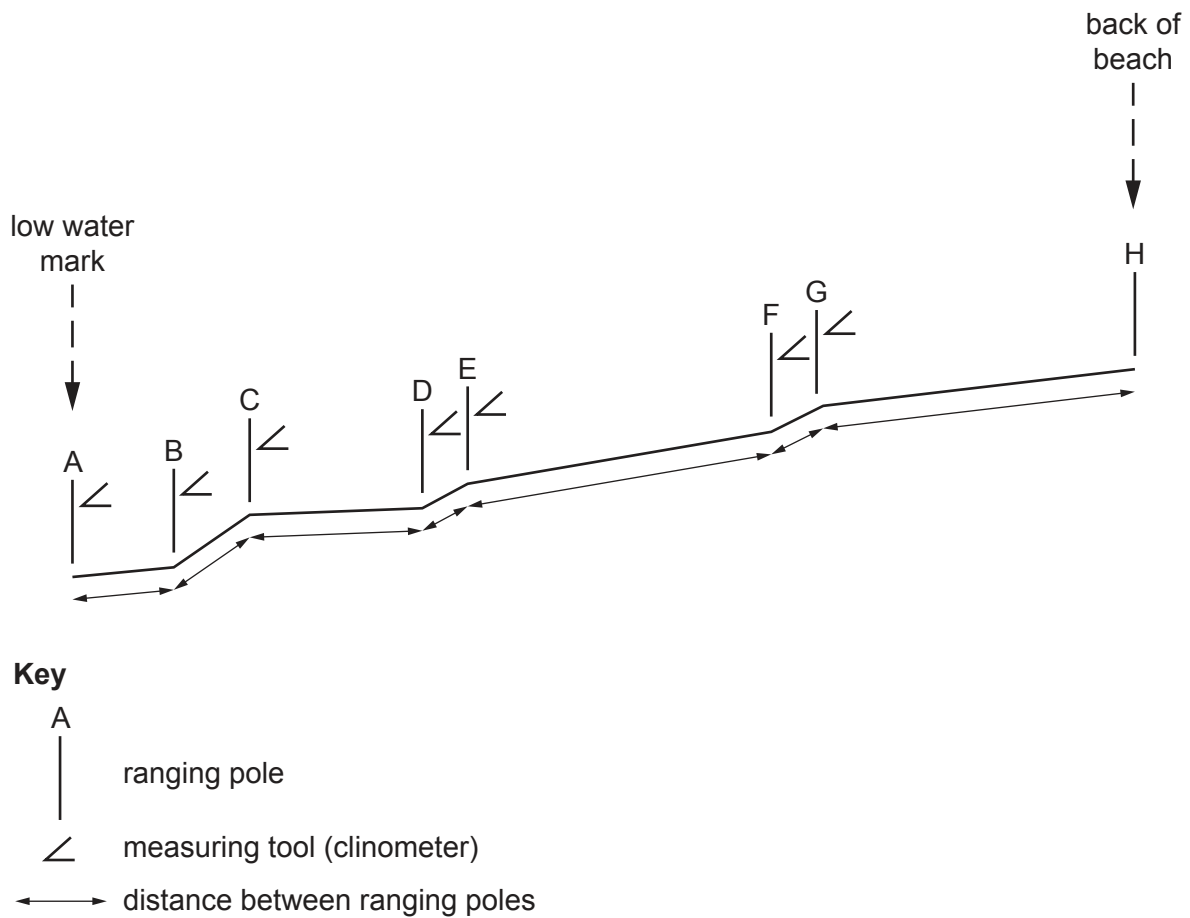


Fig. 2.2 for Question 2

Completed recording sheet for one site

Location: Centenaire beach	
Distance from low water mark: 8 m	
beach material sample number	size of beach material (mm)
1	26
2	24
3	31
4	35
average size	29

Table 2.1 for Question 2

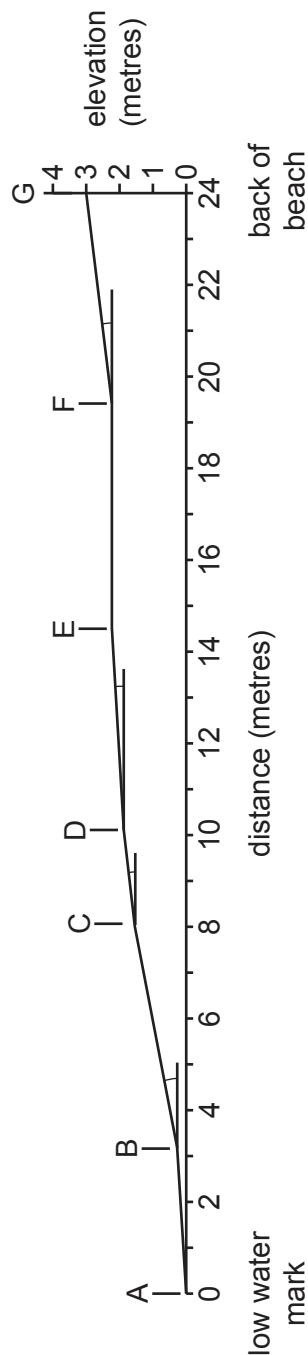
Average size of beach samples

distance from low water mark (m)	average size of beach materials (mm)	
	Magnan beach	Centenaire beach
0	19	22
2	13	23
4	17	25
6	22	31
8	15	29
10	23	31
12	29	37
14	16	52
16	28	40
18	14	61
20	21	75
22	13	
24	17	
beach average	19	39

Fig. 2.4 for Question 2

Beach profiles

Magnan beach



Key

- A site of measurement ranging pole
- slope measured

Centenaire beach

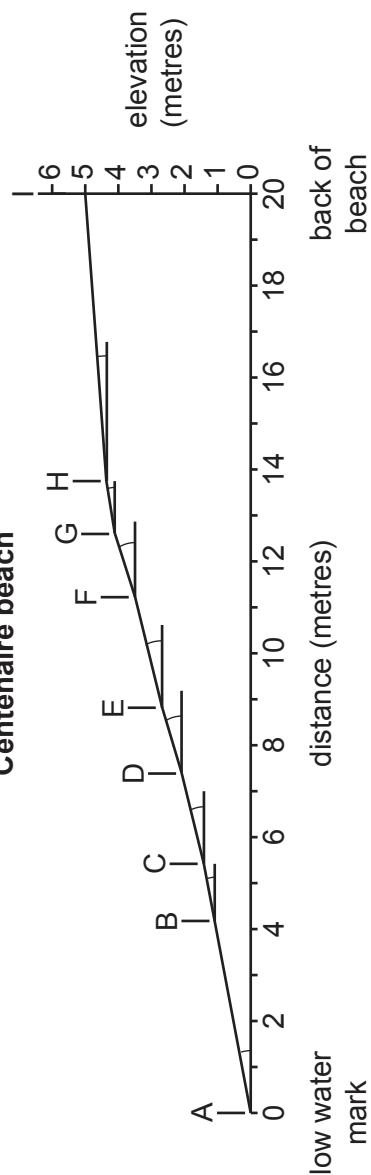
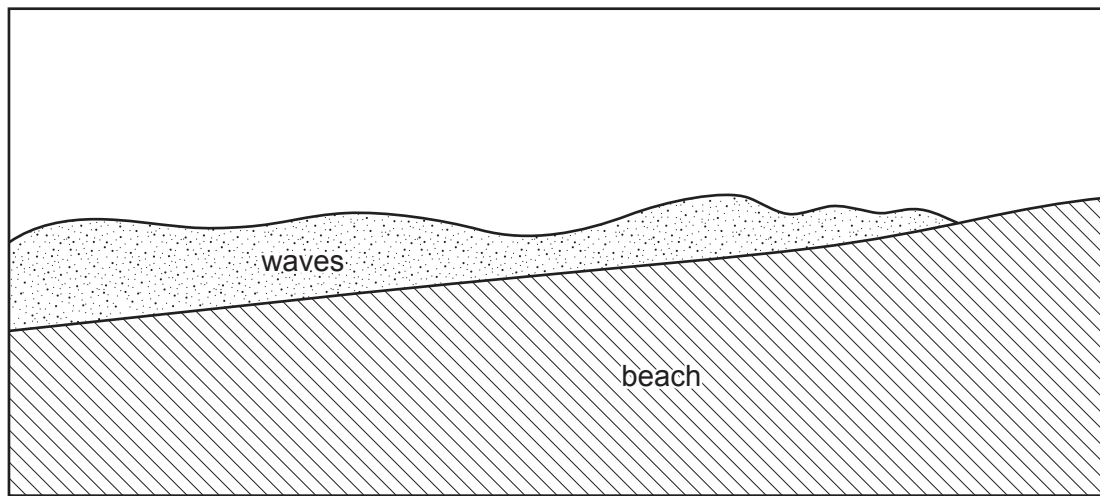


Fig. 2.5 for Question 2

Types of wave

Constructive waves



Destructive waves

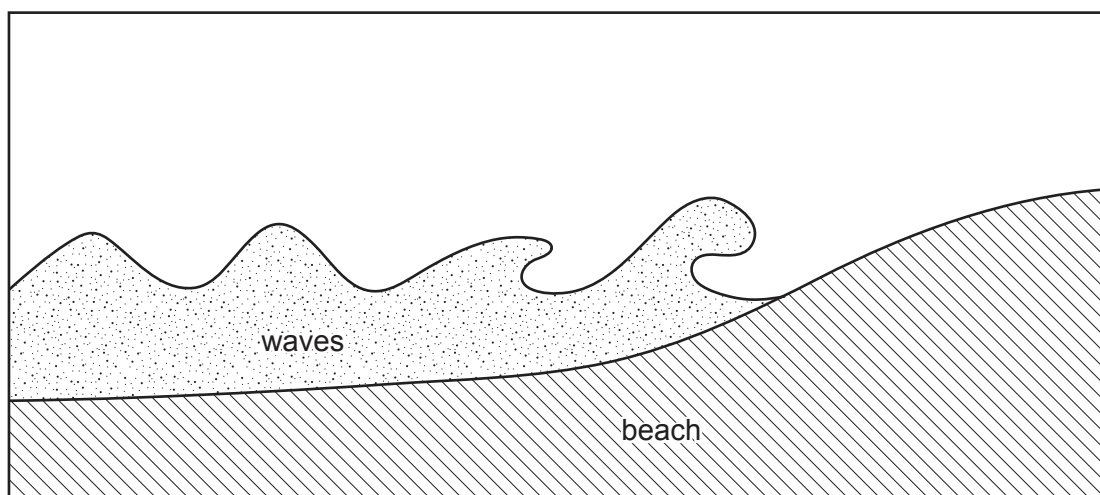


Table 2.2 for Question 2

Results of wave frequency measurements

Magnan beach			Centenaire beach	
measurement number	wave frequency (number of waves per minute)		measurement number	wave frequency (number of waves per minute)
1	8		1	11
2	8		2	13
3	9		3	14
4	10		4	11
5	9		5	14
6	9		6	15
7	8		7	12
8	10		8	13
9	9		9	15
10	10		10	11
average	9		average	13

BLANK PAGE

The boundaries and names shown, the designations used and the presentation of material on any maps contained in this question paper/insert do not imply official endorsement or acceptance by Cambridge Assessment International Education concerning the legal status of any country, territory, or area or any of its authorities, or of the delimitation of its frontiers or boundaries.

Permission to reproduce items where third-party owned material protected by copyright is included has been sought and cleared where possible. Every reasonable effort has been made by the publisher (UCLES) to trace copyright holders, but if any items requiring clearance have unwittingly been included, the publisher will be pleased to make amends at the earliest possible opportunity.

To avoid the issue of disclosure of answer-related information to candidates, all copyright acknowledgements are reproduced online in the Cambridge Assessment International Education Copyright Acknowledgements Booklet. This is produced for each series of examinations and is freely available to download at www.cambridgeinternational.org after the live examination series.

Cambridge Assessment International Education is part of Cambridge Assessment. Cambridge Assessment is the brand name of the University of Cambridge Local Examinations Syndicate (UCLES), which is a department of the University of Cambridge.